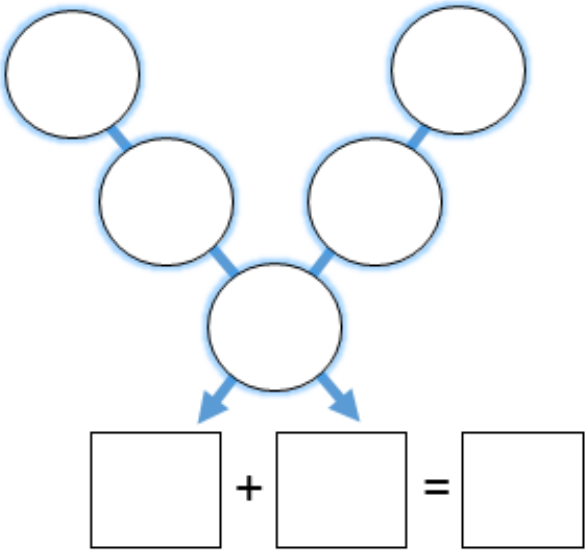
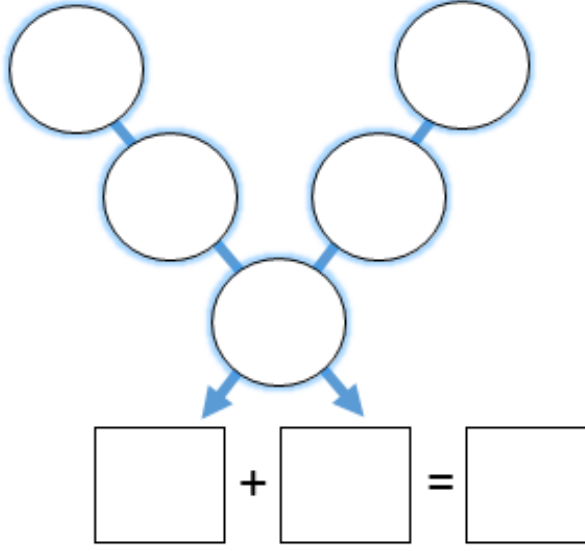
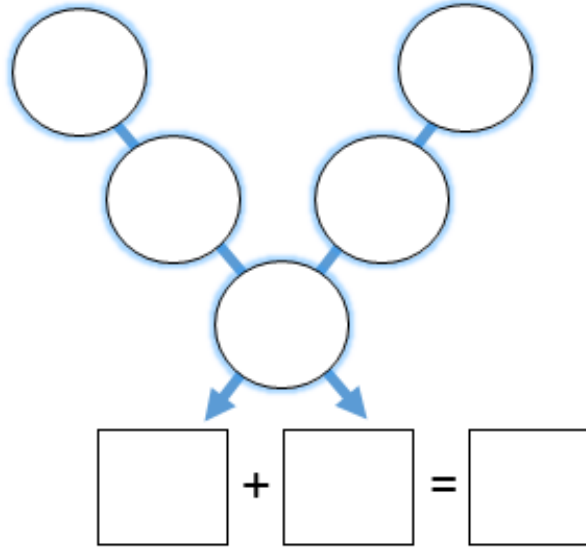




MATHS FOCUS: mental and written addition, logical and systematic thinking

HELPFUL HINTS: Think about why the bottom number in the V shape is very important

Level 1	Level 2	Level 3
<p>Immy is using a 'Magic V' to add numbers up. She places the numbers 1-5 in any of the circles and then adds up the two rows, then those totals to get a final total.</p>  <ol style="list-style-type: none"> Where could she place the numbers to get the highest total? 	<p>Immy is using a 'Magic V' to add numbers up. She places the numbers 6-10 in any of the circles and then adds up the two rows, then those totals to get a final total.</p>  <ol style="list-style-type: none"> Where could she place the numbers to get the highest total? Where could she place the numbers to get the lowest total? 	<p>Immy is using a 'Magic V' to add numbers up. She places the numbers 11-15 in any of the circles and then adds up the two rows, then those totals to get a final total.</p>  <ol style="list-style-type: none"> Where could she place the numbers to get the highest total? Explain how you know. Where could she place the numbers to get the lowest total? Explain how you know. How could she made the total of 78?